

# Generell Topologi — Solutions to Exercise Sheet 3

Richard Williamson

May 27, 2013

1

**Question.**

- (a) Let  $(X, \mathcal{O}_X)$  and  $(Y, \mathcal{O}_Y)$  be topological spaces. Prove that a map

$$X \xrightarrow{f} Y$$

is continuous if and only if  $f^{-1}(A)$  is closed in  $X$  for every closed subset  $A$  of  $Y$ .

- (b) Let  $(X, \mathcal{O}_X)$  and  $(Y, \mathcal{O}_Y)$  be topological spaces. Prove that a map

$$X \xrightarrow{f} Y$$

is continuous if and only if for every  $x \in X$  and every neighbourhood  $U$  of  $f(x)$  in  $(Y, \mathcal{O}_Y)$ , there is a neighbourhood  $U'$  of  $x$  in  $(X, \mathcal{O}_X)$  such that  $f(U') \subset U$ .

- (c) Let  $(X, \mathcal{O}_X)$  and  $(Y, \mathcal{O}_Y)$  be topological spaces, and let  $\mathcal{O}'_Y$  be a basis for  $(Y, \mathcal{O}_Y)$ . Prove that a map

$$X \xrightarrow{f} Y$$

is continuous if and only if  $f^{-1}(U) \in \mathcal{O}_X$  for every  $U \in \mathcal{O}'_Y$ .

- (d) Let  $(X, \mathcal{O}_X)$  and  $(Y, \mathcal{O}_Y)$  be topological spaces, and let  $\mathcal{O}'_Y$  be a sub-basis for  $(Y, \mathcal{O}_Y)$ . Prove that a map

$$X \xrightarrow{f} Y$$

is continuous if and only if  $f^{-1}(U) \in \mathcal{O}_X$  for every  $U \in \mathcal{O}'_Y$ .

- (e) Let  $(X, \mathcal{O}_X)$  and  $(Y, \mathcal{O}_Y)$  be topological spaces. Let  $\{U_j\}_{j \in J}$  be a basis for  $(X, \mathcal{O}_X)$ , and let  $\{U'_{j'}\}_{j' \in J'}$  be a basis for  $(Y, \mathcal{O}_Y)$ . Prove that a map

$$X \xrightarrow{f} Y$$

is continuous if and only if for each  $x \in X$  and each  $j' \in J'$  such that  $f(x) \in U'_{j'}$ , there is a  $j \in J$  such that  $x \in U_j$  and  $f(U_j) \subset U'_{j'}$ .

**Solution.**

- (a) Let  $A$  be a closed subset of  $Y$  with respect to  $\mathcal{O}_Y$ . By definition, we have that  $Y \setminus A$  is open in  $(Y, \mathcal{O}_Y)$ . If  $f$  is continuous, we deduce that

$$X \setminus (f^{-1}(A)) = f^{-1}(Y \setminus A)$$

is open in  $(X, \mathcal{O}_X)$ . Thus  $f^{-1}(A)$  is closed in  $(X, \mathcal{O}_X)$ .

Suppose that  $f^{-1}(A)$  is closed in  $(X, \mathcal{O}_X)$  for every closed subset  $A$  of  $Y$  with respect to  $\mathcal{O}_Y$ . Let  $U$  be an open subset of  $Y$  with respect to  $\mathcal{O}_Y$ . Then  $Y \setminus U$  is closed in  $(Y, \mathcal{O}_Y)$ , and we deduce that

$$X \setminus f^{-1}(U) = f^{-1}(Y \setminus U)$$

is closed in  $(X, \mathcal{O}_X)$ . Thus  $U = X \setminus (X \setminus U)$  is open in  $(X, \mathcal{O}_X)$ .

- (b) Suppose that  $f$  is continuous. Let  $x \in X$ , and let  $U$  be a neighbourhood of  $f(x)$  in  $(Y, \mathcal{O}_Y)$ . Let  $U' = f^{-1}(U)$ . Since  $f$  is continuous,  $U' \in \mathcal{O}_X$ . Moreover, we have that  $f(U') \subset U$ .

Conversely, suppose that for every  $x \in X$  and every neighbourhood  $U$  of  $f(x)$  in  $(Y, \mathcal{O}_Y)$ , there is a neighbourhood  $U'$  of  $x$  in  $(X, \mathcal{O}_X)$  such that  $f(U') \subset U$ . Let  $U'' \in \mathcal{O}_Y$ , and let  $x \in f^{-1}(U'')$ . Then  $U''$  is a neighbourhood of  $f(x)$  in  $(Y, \mathcal{O}_Y)$ . By assumption, we deduce that there is a neighbourhood  $U_x$  of  $x$  in  $(X, \mathcal{O}_X)$  such that  $f(U_x) \subset U''$ .

Then  $U_x \subset f^{-1}(U'')$ , and thus  $\bigcup_{x \in f^{-1}(U'')} U_x \subset f^{-1}(U'')$ . Since  $x \in U_x$ , we also have that  $f^{-1}(U'') \subset \bigcup_{x \in f^{-1}(U'')} U_x$ . We deduce that  $\bigcup_{x \in f^{-1}(U'')} U_x = f^{-1}(U'')$ . Since  $U_x \in \mathcal{O}_X$  for all  $x \in f^{-1}(U'')$ , we have that  $\bigcup_{x \in f^{-1}(U'')} U_x$  is open in  $(X, \mathcal{O}_X)$ . We conclude that  $f^{-1}(U'') \in \mathcal{O}_X$ , as required.

- (c) Since  $\mathcal{O}'_Y$  is a basis for  $(Y, \mathcal{O}_Y)$ , we have that  $U \in \mathcal{O}_Y$  for every  $U \in \mathcal{O}'_Y$ . If  $f$  is continuous, we thus have that  $f^{-1}(U) \in \mathcal{O}_X$  for all  $U \in \mathcal{O}'_Y$ .

Conversely, suppose that  $f^{-1}(U') \in \mathcal{O}_X$  for every  $U' \in \mathcal{O}'_Y$ . Let  $U \in \mathcal{O}_Y$ . Since  $\mathcal{O}'_Y$  is a basis for  $(Y, \mathcal{O}_Y)$ , we have that  $U = \bigcup_{j \in J} U'_j$  for a set  $\{U'_j\}_{j \in J}$  of subsets of  $Y$  which belong to  $\mathcal{O}'_Y$ . Then

$$f^{-1}(U) = f^{-1}\left(\bigcup_{j \in J} U'_j\right) = \bigcup_{j \in J} f^{-1}(U'_j).$$

By assumption, we have that  $f^{-1}(U'_j) \in \mathcal{O}_X$  for all  $j \in J$ . Since  $\mathcal{O}_X$  defines a topology on  $X$ , we deduce that  $\bigcup_{j \in J} f^{-1}(U'_j)$  belongs to  $\mathcal{O}_X$  and thus that  $f^{-1}(U) \in \mathcal{O}_X$ .

- (d) Since  $\mathcal{O}'_Y$  is a sub-basis for  $(Y, \mathcal{O}_Y)$ , we have that  $U \in \mathcal{O}_Y$  for every  $U \in \mathcal{O}'_Y$ . If  $f$  is continuous, we thus have that  $f^{-1}(U) \in \mathcal{O}_X$  for all  $U \in \mathcal{O}'_Y$ .

Conversely, let  $\mathcal{O}''_Y$  denote the set of subsets of  $Y$  obtained by taking finite intersections of subsets of  $Y$  which belong to  $\mathcal{O}'_Y$ . Then  $\mathcal{O}''_Y$  defines a basis for  $(Y, \mathcal{O}_Y)$ . We deduce by (1) that it suffices to show that  $f^{-1}(\bigcap_{j \in J} U_j) \in \mathcal{O}_X$  for any finite set  $\{U_j\}_{j \in J}$  of subsets of  $Y$  which belong to  $\mathcal{O}'_Y$ .

We have that  $f^{-1}(\bigcap_{j \in J} U_j) = \bigcap_{j \in J} f^{-1}(U_j)$ . By assumption, we have that  $f^{-1}(U_j) \in \mathcal{O}_X$  for all  $j \in J$ . Since  $J$  is finite and since  $\mathcal{O}_X$  defines a topology on  $X$ , we deduce that  $\bigcap_{j \in J} f^{-1}(U_j) \in \mathcal{O}_X$ , and thus that  $f^{-1}(\bigcap_{j \in J} U_j) \in \mathcal{O}_X$ .

- (e) Suppose that  $f$  is continuous. Let  $x \in X$  and  $j' \in J'$  be such that  $f(x) \in U'_{j'}$ . By part (b), we have that there is a neighbourhood  $U$  of  $x$  in  $(X, \mathcal{O}_X)$  such that  $f(U) \subset U'_{j'}$ . By Question 3 (b) on Exercise Sheet 2, there is a  $j \in J$  such that  $x \in U_j$  and  $U_j \subset U$ . We have that  $f(U_j) \subset f(U) \subset U'_{j'}$ , and thus that  $f(U_j) \subset U'_{j'}$ .

Conversely, suppose that for each  $x \in X$  and each  $j' \in J'$  such that  $f(x) \in U'_{j'}$ , there is a  $j \in J$  such that  $x \in U_j$  and  $f(U_j) \subset U'_{j'}$ . Let  $x \in X$ , and let  $U'$  be a neighbourhood of  $f(x)$  in  $(Y, \mathcal{O}_Y)$ . By Question 3 (b) of Exercise Sheet 2, there is a  $j' \in J'$  such that  $f(x) \in U'_{j'}$  and  $U'_{j'} \subset U'$ . By assumption, there is a  $j \in J$  such that  $x \in U_j$  and  $f(U_j) \subset U'_{j'}$ . Thus  $f(U_j) \subset U'$ . We deduce by part (b) that  $f$  is continuous.

## 2

### Question.

Let  $X = \{a, b, c\}$  be equipped with the topology

$$\mathcal{O}_X = \{\emptyset, \{b\}, \{a, b\}, \{b, c\}, X\},$$

and let  $Y = \{a', b', c', d', e'\}$  be equipped with the topology

$$\mathcal{O}_Y = \{\emptyset, \{a'\}, \{e\}, \{a', e'\}, \{b', c'\}, \{a', b', c'\}, \{b', c', e'\}, \{a', b', c', e'\}, \{b', c', d', e'\}, Y\}.$$

Which of the following maps

$$X \xrightarrow{f} Y$$

are continuous?

- (1)  $a \mapsto d', b \mapsto e', c \mapsto d'$ .
- (2)  $a \mapsto e', b \mapsto e', c \mapsto c'$ .
- (3)  $a \mapsto c', b \mapsto a', c \mapsto d'$ .
- (4)  $a \mapsto b', b \mapsto c', c \mapsto d'$ .

**Solution.**

Note that  $\mathcal{O}'_Y = \{\{a', e'\}, \{a', b', c'\}, \{b', c', d', e'\}\}$  defines a sub-basis for  $\mathcal{O}_Y$ . By Question 1 (d), it suffices to check that  $f^{-1}(U) \in \mathcal{O}_X$  for each of the three sets  $U \in \mathcal{O}'_Y$ .

- (1) We have that  $f^{-1}(\{a', e'\}) = \{b\}$ ,  $f^{-1}(\{a', b', c'\}) = \emptyset$ , and  $f^{-1}(\{b', c', d', e'\}) = X$ , all of which belong to  $\mathcal{O}_X$ . Thus  $f$  is continuous.
- (2) We have that  $f^{-1}(\{a', b', c'\}) = \{c\}$ , which does not belong to  $\mathcal{O}_X$ . Thus  $f$  is not continuous.
- (3) We have that  $f^{-1}(\{b', c', d', e'\}) = \{a, c\}$ , which does not belong to  $\mathcal{O}_X$ . Thus  $f$  is not continuous.
- (4) We have that  $f^{-1}(\{a', e'\}) = \emptyset$ ,  $f^{-1}(\{a', b', c'\}) = \{a, b\}$ , and  $f^{-1}(\{b', c', d', e'\}) = X$ , all of which belong to  $\mathcal{O}_X$ . Thus  $f$  is continuous.

### 3

**Question.**

Let  $(X, \mathcal{O}_X)$  be a topological space, and let  $\mathbb{R}$  be equipped with its standard topology  $\mathcal{O}_{\mathbb{R}}$ .

(a) Let

$$X \xrightarrow{f} \mathbb{R}$$

be a continuous map. Prove that the map

$$X \xrightarrow{|f|} \mathbb{R}$$

given by  $x \mapsto |f(x)|$  is continuous.

(b) Let

$$X \xrightarrow{f} \mathbb{R}$$

be a continuous map. Prove that for any  $k \in \mathbb{R}$ , the map

$$X \xrightarrow{kf} \mathbb{R}$$

given by  $x \mapsto k \cdot f(x)$  is continuous.

(c) Let

$$\begin{array}{ccc} X & \xrightarrow{f} & \mathbb{R} \\ & \xrightarrow{g} & \mathbb{R} \end{array}$$

be continuous maps. Prove that the map

$$X \xrightarrow{f+g} \mathbb{R}$$

given by  $x \mapsto f(x) + g(x)$  is continuous.

*Hint:*

(i) Appeal to Question 7 (a) of Exercise Sheet 2.

(ii) For any  $b \in \mathbb{R}$ , appeal to the fact that

$$\{x \in X \mid f(x) + g(x) < b\} = \bigcup_{y \in \mathbb{R}} \left( \{x \in X \mid f(x) < b - y\} \cap \{x \in X \mid g(x) < y\} \right).$$

(iii) For any  $a \in \mathbb{R}$ , appeal to an analogous expression of

$$\{x \in X \mid f(x) + g(x) > a\}$$

as a union of intersections.

(d) Let

$$X \begin{array}{c} \xrightarrow{f} \\ \xrightarrow{g} \end{array} \mathbb{R}$$

be continuous maps. Prove that the map

$$X \xrightarrow{fg} \mathbb{R}$$

given by  $x \mapsto f(x) \cdot g(x)$  is continuous.

*Hint:*

(i) Prove that if  $f(x) \geq 0$  for all  $x \in X$ , then the map

$$X \xrightarrow{f^2} \mathbb{R}$$

given by  $x \mapsto f(x) \cdot f(x)$  is continuous.

(ii) Find an expression for  $fg$  which allows you to deduce the continuity of  $fg$  from (i) and parts (a)–(c).

(e) Let

$$X \begin{array}{c} \xrightarrow{f} \\ \xrightarrow{g} \end{array} \mathbb{R}$$

be continuous maps, and suppose that  $g(x) \neq 0$  for all  $x \in X$ . Prove that

$$X \xrightarrow{\frac{f}{g}} \mathbb{R}$$

given by  $x \mapsto \frac{f(x)}{g(x)}$  is continuous.

*Hint:*

For any  $a, b \in \mathbb{R}$ , find an expression for  $\{x \in X \mid \frac{1}{f(x)} < b\}$  and an expression for  $\{x \in X \mid \frac{1}{f(x)} > a\}$  which allows you to deduce that  $f^{-1}((-\infty, b))$  and  $f^{-1}((a, \infty))$  are open in  $(X, \mathcal{O}_X)$  from the continuity of  $f$  and the continuity of  $bf$  and  $af$ .

(f) Deduce that a map

$$\mathbb{R} \longrightarrow \mathbb{R}$$

which is a quotient of polynomials, namely a map of the form

$$x \mapsto \frac{k_0 + k_1x + k_2x^2 + \dots + k_mx^m}{l_0 + l_1x + l_2x^2 + \dots + l_nx^n}$$

where  $m, n \in \mathbb{N}$ ,  $k_i \in \mathbb{R}$  for all  $0 \leq i \leq m$ , and  $l_j \in \mathbb{R}$  for all  $0 \leq j \leq n$ , is continuous.

Here we assume that

$$0 \neq l_0 + l_1x + l_2x^2 + \dots + l_nx^n$$

for all  $x \in \mathbb{R}$ .

(g) Prove that the map

$$\mathbb{R} \times \mathbb{R} \xrightarrow{\times} \mathbb{R}$$

given by  $(x, y) \mapsto xy$  is continuous.

(h) Prove that the map

$$\mathbb{R} \times \mathbb{R} \xrightarrow{+} \mathbb{R}$$

given by  $(x, y) \mapsto x + y$  is continuous.

**Solution.**

(a) By definition of  $\mathcal{O}_{\mathbb{R}}$ , the set of open intervals  $(a, b)$  in  $\mathbb{R}$  defines a basis for  $(\mathbb{R}, \mathcal{O}_{\mathbb{R}})$ . By Question 1 (c) it is sufficient to check that  $|f|^{-1}((a, b))$  is open in  $(X, \mathcal{O}_X)$  for any  $a, b \in \mathbb{R}$  with  $a < b$ .

Indeed, we have that

$$\begin{aligned}
|f^{-1}|((a, b)) &= \{x \in X \mid a < |f(x)| < b\} \\
&= \{x \in X \mid -b < f(x) < -a\} \cup \{x \in X \mid a < f(x) < b\} \\
&= f^{-1}((-b, -a)) \cup f^{-1}((a, b)) \\
&= f^{-1}((-b, -a) \cup (a, b)).
\end{aligned}$$

Since  $f$  is continuous,  $f^{-1}((-b, -a) \cup (a, b))$  is open in  $(X, \mathcal{O}_X)$ . Thus  $|f^{-1}|((a, b))$  is open in  $(X, \mathcal{O}_X)$ .

- (b) Again, it is sufficient to check that  $f^{-1}((a, b))$  is open in  $(X, \mathcal{O}_X)$  for any  $a, b \in \mathbb{R}$  with  $a < b$ .

If  $k = 0$ , then  $kf$  is the constant map  $x \mapsto 0$  for all  $x \in X$ . By Proposition 2.18 in the Lecture Notes, we deduce that  $kf$  is continuous.

If  $k > 0$ , we have that

$$\begin{aligned}
(kf)^{-1}((a, b)) &= \{x \in X \mid a < kf(x) < b\} \\
&= \{x \in X \mid \frac{a}{k} < f(x) < \frac{b}{k}\} \\
&= f^{-1}((ka, kb)).
\end{aligned}$$

Since  $f$  is continuous,  $f^{-1}((ka, kb))$  is open in  $(X, \mathcal{O}_X)$ . Thus  $(kf)^{-1}((a, b))$  is open in  $(X, \mathcal{O}_X)$ .

If  $k < 0$ , we have that

$$\begin{aligned}
(kf)^{-1}((a, b)) &= \{x \in X \mid a < kf(x) < b\} \\
&= \{x \in X \mid \frac{b}{k} < f(x) < \frac{a}{k}\} \\
&= f^{-1}((kb, ka)).
\end{aligned}$$

Since  $f$  is continuous,  $f^{-1}((kb, ka))$  is open in  $(X, \mathcal{O}_X)$ . Thus  $(kf)^{-1}((a, b))$  is open in  $(X, \mathcal{O}_X)$ .

- (c) By Question 7 (a) of Exercise Sheet 2,

$$\{(-\infty, b) \mid b \in \mathbb{R}\} \cup \{(a, \infty) \mid a \in \mathbb{R}\}$$

defines a sub-basis for  $(\mathbb{R}, \mathcal{O}_{\mathbb{R}})$ . By Question 1 (d) it is therefore sufficient to check that  $(f + g)^{-1}((-\infty, b)) \in \mathcal{O}_X$  for all  $b \in \mathbb{R}$  and that  $(f + g)^{-1}((a, \infty)) \in \mathcal{O}_X$  for all  $a \in \mathbb{R}$ .

Let us prove that

$$\{x \in X \mid f(x) + g(x) < b\} = \bigcup_{y \in \mathbb{R}} \left( \{x \in X \mid f(x) < b - y\} \cap \{x \in X \mid g(x) < y\} \right).$$



Suppose that  $x \in X$  has the property that  $f(x) < b - y$  and  $g(x) < y$  for some  $y \in \mathbb{R}$ . Then  $f(x) + g(x) < (b - y) + y = b$ . Thus we have that

$$\bigcup_{y \in \mathbb{R}} \left( \{x \in X \mid f(x) < b - y\} \cap \{x \in X \mid g(x) < y\} \right) \subset \{x \in X \mid f(x) + g(x) < b\}.$$

Conversely, suppose that  $x' \in X$  has the property that  $f(x') + g(x') < b$ . Take any  $y \in \mathbb{R}$  be such that  $g(x') < y < b - f(x')$ . Then

$$x' \in \{x \in X \mid f(x) < b - y\} \cap \{x \in X \mid g(x) < y\}.$$

We deduce that

$$\{x \in X \mid f(x) + g(x) < b\} \subset \bigcup_{y \in \mathbb{R}} \left( \{x \in X \mid f(x) < b - y\} \cap \{x \in X \mid g(x) < y\} \right).$$

This completes the proof that

$$\{x \in X \mid f(x) + g(x) < b\} = \bigcup_{y \in \mathbb{R}} \left( \{x \in X \mid f(x) < b - y\} \cap \{x \in X \mid g(x) < y\} \right).$$

We have that

$$\begin{aligned} (f + g)^{-1}((-\infty, b)) &= \{x \in X \mid f(x) + g(x) < b\} \\ &= \bigcup_{y \in \mathbb{R}} \left( \{x \in X \mid f(x) < b - y\} \cap \{x \in X \mid g(x) < y\} \right) \\ &= \bigcup_{y \in \mathbb{R}} \left( f^{-1}((-\infty, b - y)) \cap g^{-1}((-\infty, y)) \right). \end{aligned}$$

Since  $f$  is continuous,  $f^{-1}((-\infty, b - y))$  is open in  $(X, \mathcal{O}_X)$ . Since  $g$  is continuous,  $g^{-1}((-\infty, y))$  is open in  $(X, \mathcal{O}_X)$ . Thus  $f^{-1}((-\infty, b - y)) \cap g^{-1}((-\infty, y))$  is open in  $(X, \mathcal{O}_X)$  for all  $y \in \mathbb{R}$ , and hence

$$\bigcup_{y \in \mathbb{R}} \left( f^{-1}((-\infty, b - y)) \cap g^{-1}((-\infty, y)) \right)$$

is open in  $(X, \mathcal{O}_X)$ . Thus  $(f + g)^{-1}((-\infty, b))$  is open in  $(X, \mathcal{O}_X)$ .

Similarly we have that

$$\begin{aligned} (f + g)^{-1}((a, \infty)) &= \{x \in X \mid f(x) + g(x) > a\} \\ &= \bigcup_{y \in \mathbb{R}} \left( \{x \in X \mid f(x) > a - y\} \cap \{x \in X \mid g(x) > y\} \right) \\ &= \bigcup_{y \in \mathbb{R}} \left( f^{-1}((a - y, \infty)) \cap g^{-1}((a, \infty)) \right). \end{aligned}$$

Since  $f$  is continuous,  $f^{-1}((a - y, \infty))$  is open in  $(X, \mathcal{O}_X)$ . Since  $g$  is continuous,  $g^{-1}((y, \infty))$  is open in  $(X, \mathcal{O}_X)$ . Thus  $f^{-1}((a - y, \infty)) \cap g^{-1}((y, \infty))$  is open in  $(X, \mathcal{O}_X)$  for all  $y \in \mathbb{R}$ , and hence

$$\bigcup_{y \in \mathbb{R}} \left( f^{-1}((a - y, \infty)) \cap g^{-1}((y, \infty)) \right)$$

is open in  $(X, \mathcal{O}_X)$ . Thus  $(f + g)^{-1}((a, \infty))$  is open in  $(X, \mathcal{O}_X)$ .

- (d) Let us first prove that if  $f(x) \geq 0$  for all  $x \in X$ , then  $f^2$  is continuous. As in parts (a) and (b), it is sufficient to check that  $(f^2)^{-1}((a, b))$  is open in  $(X, \mathcal{O}_X)$  for any  $a, b \in \mathbb{R}$  with  $a < b$ . Indeed we have that

$$\begin{aligned} (f^2)^{-1}((a, b)) &= \{x \in X \mid \{x \in X \mid a < f(x) \cdot f(x) < b\}\} \\ &= \{x \in X \mid \sqrt{a} < f(x) < \sqrt{b}\} \\ &= f^{-1}((\sqrt{a}, \sqrt{b})). \end{aligned}$$

Since  $f$  is continuous,  $f^{-1}((\sqrt{a}, \sqrt{b}))$  is open in  $(X, \mathcal{O}_X)$ , and thus  $(f^2)^{-1}((a, b))$  is open in  $(X, \mathcal{O}_X)$ .

Next, note that  $f(x) \cdot g(x) = \frac{1}{4} \left( |f(x) + g(x)|^2 - |f(x) - g(x)|^2 \right)$ . By part (c) we have that  $f + g$  is continuous. By part (a) we deduce that  $|f + g|$  is continuous. By part (b) we have that  $-g$  is continuous. Thus by part (c) we have that  $f - g$  is continuous. By part (a) we deduce that  $|f - g|$  is continuous.

Hence  $|f + g|^2$  and  $|f - g|^2$  are continuous. By part (c) we deduce that  $|f + g|^2 + |f - g|^2$  is continuous. By part (b) we conclude that  $\frac{1}{4} \left( |f(x) + g(x)|^2 - |f(x) - g(x)|^2 \right)$  is continuous, and thus that  $fg$  is continuous.

- (e) Let us first prove that the map

$$X \xrightarrow{\frac{1}{g}} \mathbb{R}$$

given by  $x \mapsto \frac{1}{g(x)}$  is continuous. We proceed as in (c). By Question 7 (a) of Exercise Sheet 2,

$$\{(-\infty, b) \mid b \in \mathbb{R}\} \cup \{(a, \infty) \mid a \in \mathbb{R}\}$$

defines a sub-basis for  $(\mathbb{R}, \mathcal{O}_{\mathbb{R}})$ . By Question 1 (d) it is therefore sufficient to check that  $(\frac{1}{g})^{-1}((-\infty, b)) \in \mathcal{O}_X$  for all  $b \in \mathbb{R}$  and that  $(\frac{1}{g})^{-1}((a, \infty)) \in \mathcal{O}_X$  for all  $a \in \mathbb{R}$ .

Note that

$$\{x \in X \mid \frac{1}{g(x)} > a\}$$

is the union of

$$\{x \in X \mid g(x) > 0\} \cap \{x \in X \mid ag(x) < 1\}$$

and

$$\{x \in X \mid g(x) < 0\} \cap \{x \in X \mid ag(x) > 1\}.$$

Since  $g$  is continuous,  $g^{-1}((0, \infty)) = \{x \in X \mid g(x) > 0\}$  is open in  $X$ , and  $g^{-1}((-\infty, 0)) = \{x \in X \mid g(x) < 0\}$  is open in  $X$ .

Moreover, by (b), the map

$$X \xrightarrow{ag} \mathbb{R}$$

is continuous, since  $g$  is continuous. Hence

$$(ag)^{-1}((-\infty, 1)) = \{x \in X \mid ag(x) < 1\}$$

is open in  $X$ , and

$$(ag)^{-1}((1, \infty)) = \{x \in X \mid ag(x) > 1\}$$

is open in  $X$ . We conclude that

$$\left(\frac{1}{g}\right)^{-1}((a, \infty)) = \{x \in X \mid \frac{1}{g(x)} > a\}$$

is open in  $X$ .

Similarly, note that

$$\{x \in X \mid \frac{1}{g(x)} < b\}$$

is the union of

$$\{x \in X \mid g(x) > 0\} \cap \{x \in X \mid ag(x) > 1\}$$

and

$$\{x \in X \mid g(x) < 0\} \cap \{x \in X \mid ag(x) < 1\}.$$

We deduce in the same way as above that

$$\left(\frac{1}{g(x)}\right)^{-1}((-\infty, b)) = \{x \in X \mid \frac{1}{g(x)} < b\}$$

is open in  $X$ .

This completes the proof that  $\frac{1}{g}$  is continuous. Since  $\frac{f}{g} = f \cdot \left(\frac{1}{g}\right)$ , we deduce from (d) that  $\frac{f}{g}$  is continuous.

(f) Note first that the identity map

$$\mathbb{R} \xrightarrow{id} \mathbb{R},$$

namely the map given by  $x \mapsto x$ , is continuous. Indeed, if  $U$  is open in  $\mathbb{R}$ , then  $id^{-1}(U) = U$  is open in  $\mathbb{R}$ . By (d) and induction, we deduce that for any  $n \geq 1$  the map

$$\mathbb{R} \longrightarrow \mathbb{R}$$

given by  $x \mapsto x^n$  is continuous. By (b), we deduce that for any  $n \geq 0$  and any  $k_n \in \mathbb{R}$  the map

$$X \xrightarrow{\mathbb{R}} X$$

given by  $x \mapsto k_n x^n$  is continuous.

By Proposition 2.18 in the Lecture Notes, we also have that the constant map

$$\mathbb{R} \longrightarrow \mathbb{R}$$

given by  $x \mapsto k_0$  for all  $x \in X$  is continuous, for any  $k_0 \in \mathbb{R}$ . By (c), we deduce that a polynomial map

$$\mathbb{R} \longrightarrow \mathbb{R},$$

namely a map given by

$$x \mapsto k_0 + k_1 x + k_2 x^2 + \dots + k_n x^n$$

for some  $n \geq 0$  and  $k_n \in \mathbb{R}$  is continuous. By (e), we conclude that a quotient of polynomials as in the question is continuous.

(g) The map

$$\mathbb{R} \times \mathbb{R} \xrightarrow{\times} \mathbb{R}$$

is the product  $p_1 \cdot p_2$  of the maps

$$\mathbb{R} \times \mathbb{R} \xrightarrow{p_1} \mathbb{R}$$

and

$$\mathbb{R} \times \mathbb{R} \xrightarrow{p_2} \mathbb{R}.$$

By Proposition 3.2 in the Lecture Notes, we have that  $p_1$  and  $p_2$  are continuous. By (d), we deduce that  $\times$  is continuous.

(h) The map

$$\mathbb{R} \times \mathbb{R} \xrightarrow{\times} \mathbb{R}$$

is the sum  $p_1 + p_2$  of the maps

$$\mathbb{R} \times \mathbb{R} \xrightarrow{p_1} \mathbb{R}$$

and

$$\mathbb{R} \times \mathbb{R} \xrightarrow{p_2} \mathbb{R}.$$

Again, by Proposition 3.2 in the Lecture Notes, we have that  $p_1$  and  $p_2$  are continuous. By (c), we deduce that  $\times$  is continuous.

## 4

### Question.

(a) Let  $(X, \mathcal{O}_X)$ ,  $(Y, \mathcal{O}_Y)$ , and  $(Z, \mathcal{O}_Z)$  be topological spaces, and let

$$Z \xrightarrow{f} X$$

and

$$Z \xrightarrow{g} Y$$

be continuous maps. Prove that the map

$$Z \xrightarrow{f \times g} X \times Y$$

given by  $z \mapsto (f(z), g(z))$  is continuous.

(b) Let  $(X, \mathcal{O}_X)$ ,  $(Y, \mathcal{O}_Y)$ , and  $(Z, \mathcal{O}_Z)$  be topological spaces. Prove that a map

$$Z \xrightarrow{f} X \times Y$$

is continuous if and only if the maps

$$Z \xrightarrow{p_1 \circ f} X$$

and

$$Z \xrightarrow{p_2 \circ f} Y$$

are continuous.

(c) Let  $(X, \mathcal{O}_X)$ ,  $(Y, \mathcal{O}_Y)$ ,  $(X', \mathcal{O}_{X'})$ , and  $(Y', \mathcal{O}_{Y'})$  be topological spaces, and let

$$X \xrightarrow{f} X'$$

and

$$Y \xrightarrow{g} Y'$$

be continuous maps. Prove that the map

$$X \times Y \xrightarrow{f \times g} X' \times Y'$$

given by  $(x, y) \mapsto (f(x), g(y))$  is continuous.

(d) Let  $(X, \mathcal{O}_X)$  be a topological space. Prove that the map

$$X \xrightarrow{\Delta} X \times X$$

given by  $x \mapsto (x, x)$  is continuous.

(e) Let  $(X, \mathcal{O}_X)$  and  $(Y, \mathcal{O}_Y)$  be topological spaces. Prove that the map

$$X \times Y \xrightarrow{\tau} Y \times X$$

given by  $(x, y) \mapsto (y, x)$  is continuous.

**Solution.**

(a) By Question 4 (a) of Exercise Sheet 2, we have that  $\{U \times U' \mid U \in \mathcal{O}_X, U' \in \mathcal{O}_Y\}$  defines a basis for  $\mathcal{O}_{X \times Y}$ . By Question 1 (c), it therefore suffices to prove that  $(f \times g)^{-1}(U \times U') \in \mathcal{O}_Z$  for any  $U \in \mathcal{O}_X$  and  $U' \in \mathcal{O}'_Y$ .

Indeed, we have that  $(f \times g)^{-1}(U \times U') = f^{-1}(U) \cap g^{-1}(U')$ . Since  $f$  is continuous,  $f^{-1}(U) \in \mathcal{O}_Z$ . Since  $g$  is continuous,  $g^{-1}(U') \in \mathcal{O}_Z$ . Hence  $f^{-1}(U) \cap g^{-1}(U') \in \mathcal{O}_Z$ .

(b) By Proposition 3.2 of the Lecture Notes, we have that  $p_1$  and  $p_2$  are continuous. Hence, by Proposition 2.16 of the Lecture Notes, if  $f$  is continuous then  $p_1 \circ f$  and  $p_2 \circ f$  are continuous.

Conversely, suppose that  $p_1 \circ f$  and  $p_2 \circ f$  are continuous. We have that  $f = (p_1 \circ f) \times (p_2 \circ f)$ . We deduce from (a) that  $f$  is continuous.

(c) We have that  $f \times g = (p'_1 \circ (f \times g)) \times (p'_2 \circ (f \times g))$ , where

$$X' \times Y' \xrightarrow{p'_1} X'$$

and

$$X' \times Y' \xrightarrow{p'_2} Y'$$

are the projection maps. By (b), we deduce that  $f \times g$  is continuous.

(d) We have that  $\Delta = id \times id$ . Since  $id$  is continuous,  $\Delta$  is continuous by (a).

(e) We have that  $\tau = p_2 \times p_1$ , where

$$X \times Y \xrightarrow{p_1} X$$

and

$$X \times Y \xrightarrow{p_2} Y$$

are the projection maps. Since  $p_1$  and  $p_2$  are continuous by Proposition 3.2 in the Lecture Notes, we deduce that  $\tau$  is continuous by (a).

## 5

### Question.

Let  $(X, \mathcal{O}_X)$  and  $(X', \mathcal{O}_{X'})$  be topological spaces. Let

$$X \times Y \xrightarrow{p_1} X$$

and

$$X \times Y \xrightarrow{p_2} Y$$

denote the projection maps.

Let  $A$  be a closed subset of  $(X, \mathcal{O}_X)$ , and let  $A'$  be a closed subset of  $(X', \mathcal{O}_{X'})$ . By Proposition 3.2 in the Lecture Notes we have that  $p_1$  and  $p_2$  are continuous. Use this to prove that  $A \times A'$  is a closed subset of  $(X \times X', \mathcal{O}_{X \times X'})$ .

### Solution.

Since  $p_1$  is continuous and  $A$  is closed in  $(X, \mathcal{O}_X)$  we have by Question 1 (a) that  $p_1^{-1}(A)$  is closed in  $(X \times Y, \mathcal{O}_{X \times Y})$ . In addition we have that  $A \times X' = p_1^{-1}(A)$ . Thus  $A \times X'$  is closed in  $(X \times Y, \mathcal{O}_{X \times Y})$ .

Since  $p_2$  is continuous and  $A'$  is closed in  $(X', \mathcal{O}_{X'})$  we have by Question 1 (a) that  $p_2^{-1}(A')$  is closed in  $X \times Y$ . In addition we have that  $X \times A' = p_2^{-1}(A')$ . Thus  $X \times A'$  is closed in  $(X \times Y, \mathcal{O}_{X \times Y})$ .

We have that  $A \times A' = (A \times X') \cap (X \times A')$ . Since both  $A \times X'$  and  $X \times A'$  are closed in  $(X \times Y, \mathcal{O}_{X \times Y})$  we deduce that  $A \times A'$  is closed in  $(X \times Y, \mathcal{O}_{X \times Y})$ .

## 6

### Question.

Let  $(X, \mathcal{O}_X)$  and  $(Y, \mathcal{O}_Y)$  be topological spaces, and let  $A$  be a subset of  $X$  equipped with the subspace topology  $\mathcal{O}_A$  with respect to  $(X, \mathcal{O}_X)$ .



(a) Let

$$X \xrightarrow{f} Y$$

be a continuous map. Prove that the restriction of  $f$  to  $A$  defines a continuous map

$$A \longrightarrow Y.$$

(b) Let

$$A \xrightarrow{i} X$$

denote the inclusion map. Prove that a map

$$Y \xrightarrow{f} A$$

is continuous if and only if the map

$$Y \xrightarrow{i \circ f} X$$

is continuous.

(c) Let  $(X, \mathcal{O}_X)$  and  $(Y, \mathcal{O}_Y)$  be topological spaces, and let  $A$  be a subset of  $X$  equipped with the subspace topology  $\mathcal{O}_A$  with respect to  $(X, \mathcal{O}_X)$ . Give an example to show that a continuous map

$$A \xrightarrow{f} Y$$

need not extend to a continuous map

$$X \longrightarrow Y.$$

In other words, find topological spaces  $(X, \mathcal{O}_X)$ ,  $(Y, \mathcal{O}_Y)$ , and  $(A, \mathcal{O}_A)$  and a continuous map

$$A \xrightarrow{f} Y$$

which cannot be the restriction of any continuous map

$$X \longrightarrow Y.$$

**Solution.**

- (a) Let  $f'$  denote the restriction of  $f$  to  $A$ . Let  $U \in \mathcal{O}_Y$ . Then  $(f')^{-1}(U) = A \cap f^{-1}(U)$ . Since  $f$  is continuous,  $f^{-1}(U) \in \mathcal{O}_X$ . Hence, by definition of  $\mathcal{O}_A$ , we have that  $A \cap f^{-1}(U)$  is open in  $(A, \mathcal{O}_A)$ . Thus  $(f')^{-1}(U)$  is open in  $(A, \mathcal{O}_A)$ .
- (b) By Proposition 2.15 in the Lecture Notes,  $i$  is continuous. Thus if  $f$  is continuous, then  $i \circ f$  is continuous by Proposition 2.16 in the Lecture Notes.

Conversely, suppose that  $i \circ f$  is continuous. Let  $U \in \mathcal{O}_A$ . Then  $U = A \cap U'$  for some  $U' \in \mathcal{O}_X$ . We have that

$$\begin{aligned} (i \circ f)^{-1}(U') &= f^{-1}(i^{-1}(U')) \\ &= f^{-1}(A \cap U') \\ &= f^{-1}(U). \end{aligned}$$

If  $i \circ f$  is continuous, then  $(i \circ f)^{-1}(U')$  is open in  $Y$ , and hence  $f^{-1}(U)$  is open in  $Y$ .

- (c) We can for instance take both  $(X, \mathcal{O}_X)$  and  $(Y, \mathcal{O}_Y)$  to be  $(\mathbb{R}, \mathcal{O}_{\mathbb{R}})$ , let  $A = (-\infty, 0) \sqcup (0, \infty)$  be equipped with the subspace topology with respect to  $(\mathbb{R}, \mathcal{O}_{\mathbb{R}})$ , and define

$$A \xrightarrow{f} \mathbb{R}$$

to be the map given by  $x \mapsto 0$  if  $x \in (-\infty, 0)$  and  $x \mapsto 1$  if  $x \in (0, \infty)$ .

Then  $f$  is continuous. After we have explored ‘coproduct topologies’ we will be able to see this immediately, but let us here verify it by hand. Let  $U \in \mathcal{O}_{\mathbb{R}}$ . If  $0 \in U$  and  $1 \notin U$ , then  $f^{-1}(U) = (-\infty, 0) \in \mathcal{O}_A$ . If  $1 \in U$  and  $0 \notin U$ , then  $f^{-1}(U) = (0, \infty) \in \mathcal{O}_A$ . If  $0 \in U$  and  $1 \in U$ , then  $f^{-1}(U) = (-\infty, 0) \cup (0, \infty)$ , which is open in  $\mathcal{O}_A$ . Finally, if  $0 \notin U$  and  $1 \notin U$ , then  $f^{-1}(U) = \emptyset \in \mathcal{O}_A$ .

Let

$$\mathbb{R} \xrightarrow{f'} \mathbb{R}$$

be a map whose restriction to  $A$  is  $f$ . If  $f'(0) \neq 0$  and  $f' \neq 1$ , there is an open interval  $(a, b)$  such that  $f'(0) \in (a, b)$  and  $0 \notin (a, b)$  and  $1 \notin (a, b)$ . Then  $f'((a, b)) = \{0\}$ , which is not open in  $\mathbb{R}$ .

If  $f'(0) = 0$ , then for any  $U \in \mathcal{O}_{\mathbb{R}}$  such that  $0 \in U$  we have that  $(f')^{-1}(U) = (-\infty, 0]$ , which is not open in  $(\mathbb{R}, \mathcal{O}_{\mathbb{R}})$  since it cannot be obtained as a union of open intervals (check that you can rigorously prove this — it is not difficult!).

If  $f'(0) = 1$ , then for any  $U \in \mathcal{O}_{\mathbb{R}}$  such that  $0 \in U$  we have that  $(f')^{-1}(U) = [0, \infty)$ , which similarly is not open in  $(\mathbb{R}, \mathcal{O}_{\mathbb{R}})$ .

This proves that  $f'$  cannot be continuous.

## 7

### Question.

Let  $(X, \mathcal{O}_X)$  and  $(Y, \mathcal{O}_Y)$  be topological spaces, and let  $A$  be a subset of  $Y$ . Let  $A$  be equipped with the subspace topology  $\mathcal{O}_A$  with respect to  $(Y, \mathcal{O}_Y)$ .

- (a) Prove that if

$$X \xrightarrow{f} Y$$

is a continuous map such that  $f(X) \subset A$ , then the map

$$X \longrightarrow A$$

given by  $x \mapsto f(x)$  is continuous.

- (b) Prove that if

$$X \xrightarrow{f} A$$

is a continuous map, then the map

$$X \longrightarrow Y$$

given by  $x \mapsto f(x)$  is continuous.

### Solution.

(a) Let

$$X \xrightarrow{f'} A$$

denote the map given by  $x \mapsto f(x)$ . Let  $U \in \mathcal{O}_A$ . By definition of  $\mathcal{O}_A$ , we have that  $U = A \cap U'$  for some  $U' \in \mathcal{O}_Y$ . Since  $f(X) \subset A$ , we have that

$$\begin{aligned} f^{-1}(U) &= f^{-1}(A \cap U') \\ &= f^{-1}(A) \cap f^{-1}(U') \\ &= X \cap f^{-1}(U') \\ &= f^{-1}(U'). \end{aligned}$$

Since  $(f')^{-1}(U) = f^{-1}(U)$ , we deduce that  $(f')^{-1}(U) = f^{-1}(U')$ . Since  $f$  is continuous,  $f^{-1}(U') \in \mathcal{O}_X$ . Thus  $(f')^{-1}(U) \in \mathcal{O}_X$ .

(b) Let

$$X \xrightarrow{f'} Y$$

denote the map given by  $x \mapsto f(x)$ . Let  $U \in \mathcal{O}_Y$ . By definition of  $\mathcal{O}_A$ , we have that  $A \cap U$  is open in  $(A, \mathcal{O}_A)$ . Since  $f$  is continuous, we deduce that  $f^{-1}(A \cap U)$  is open in  $(X, \mathcal{O}_X)$ . We have that  $f^{-1}(A \cap U) = f^{-1}(A) \cap f^{-1}(U) = X \cap f^{-1}(U) = f^{-1}(U) = (f')^{-1}(U)$ . Thus  $(f')^{-1}(U)$  is open in  $(X, \mathcal{O}_X)$ .

## 8

Let  $X$  and  $Y$  be sets, and let  $\{A_j\}_{j \in J}$  be a set of subsets of  $(X, \mathcal{O}_X)$  such that  $X = \bigcup_{j \in J} A_j$ . Let  $A = \bigcap_{j \in J} A_j$ .

Suppose that for every  $j \in J$  we have a map

$$A_j \xrightarrow{f_j} Y$$

such that the restriction of  $f_j$  to  $A$  is equal to the restriction of  $f_{j'}$  to  $A$  for all  $(j, j') \in J \times J$ . Then the map

$$X \xrightarrow{g} Y$$

given by  $x \mapsto f_j(x)$  if  $x \in A_j$  is well-defined.

Now let  $\mathcal{O}_X$  be a topology upon  $X$ , and let  $\mathcal{O}_Y$  be a topology upon  $Y$ . Equip every  $A_j$  for  $j \in J$  with the subspace topology with respect  $(X, \mathcal{O}_X)$ . Suppose that  $f_j$  is continuous for every  $j \in J$ .

**Question.**

- (a) Prove that if  $A_j$  is open in  $(X, \mathcal{O}_X)$  for every  $j \in J$ , then  $g$  is continuous.
- (b) Prove that if  $J$  is finite and  $A_j$  is closed in  $(X, \mathcal{O}_X)$  for every  $j \in J$ , then  $g$  is continuous.
- (c) Find an example to show that for an arbitrary finite set  $\{A_j\}$ , it need not be the case that  $g$  is continuous.
- (d) Find an example to show that when  $J$  is infinite, then  $g$  need not be continuous even if  $A_j$  is closed in  $(X, \mathcal{O}_X)$  for every  $j \in J$ .

**Remark 0.1.** The result of (a) and (b) is known as the *glueing lemma* or *pasting lemma*.

**Solution.**

- (a) Let  $U \in \mathcal{O}_Y$ . We have that  $g^{-1}(U) = \bigcup_{j \in J} f_j^{-1}(U)$ . Since  $f_j$  is continuous for all  $j \in J$  we have that  $f_j^{-1}(U) \in \mathcal{O}_{A_j}$  for all  $j \in J$ . Since  $A_j$  is open in  $X$ , we deduce that  $\bigcup_{j \in J} f_j^{-1}(U)$  is open in  $(X, \mathcal{O}_X)$ . Thus  $g^{-1}(U)$  is open in  $X$ .
- (b) By induction, it suffices to consider the case that  $X = A_1 \cup A_2$  for subsets  $A_1$  and  $A_2$  of  $X$ . Let

$$A_1 \xrightarrow{f_1} Y$$

denote the restriction of  $f$  to  $A_1$ , and let

$$A_1 \xrightarrow{f_1} Y$$

denote the restriction of  $f$  to  $A_2$ .

Let  $V$  be a closed subset of  $Y$ . Since  $f_1$  is continuous, by Question 1 (a) we have that  $f_1^{-1}(V)$  is closed in  $A_1$ . Since  $A_1$  is closed in  $X$ , we deduce that  $f_1^{-1}(V)$  is closed in  $X$ .

Similarly, since  $f_2$  is continuous, by Question 2 (a) we have that  $f_2^{-1}(V)$  is closed in  $A_2$ . Since  $A_2$  is closed in  $X$ , we deduce that  $f_2^{-1}(V)$  is closed in  $X$ .

Note that

$$f^{-1}(V) = f_1^{-1}(V) \cup f_2^{-1}(V).$$

Since  $f_1^{-1}(V)$  and  $f_2^{-1}(V)$  are closed in  $X$ , we deduce that  $f^{-1}(V)$  is closed in  $X$ .

(c) Let  $(X, \mathcal{O}_X)$  be  $(\mathbb{R}, \mathcal{O}_{\mathbb{R}})$ , and let  $X = (-\infty, 0) \cup [0, \infty)$ . Let

$$\mathbb{R} \xrightarrow{f} \mathbb{R}$$

denote the map given by

$$x \mapsto \begin{cases} 0 & \text{if } x < 0, \\ 1 & \text{if } x \geq 0. \end{cases}$$

The restriction  $f_1$  of  $f$  to  $(-\infty, 0)$  is the constant map given by  $x \mapsto 0$  for all  $x \in (-\infty, 0)$ . The restriction  $f_2$  of  $f$  to  $[0, \infty)$  is the constant map given by  $x \mapsto 1$  for all  $x \in [0, \infty)$ . By Proposition 2.18 in the Lecture Notes, we have that both  $f_1$  and  $f_2$  are continuous.

But  $f$  is not continuous, since  $f^{-1}(U) = [0, \infty)$  for any  $U \in \mathcal{O}_{\mathbb{R}}$  such that  $1 \in U$  and  $0 \notin U$ . As we already observed in the solution to Question 6 (c),  $[0, \infty)$  is not an open subset of  $(\mathbb{R}, \mathcal{O}_{\mathbb{R}})$ .

(d) Let  $(X, \mathcal{O}_X) = [0, 1]$ , let  $A_n = [\frac{1}{n}, 1]$  for any  $n \in \mathbb{N}$  with  $n \geq 1$ , and let  $A_0 = \{0\}$ . Define

$$[\frac{1}{n}, 1] \xrightarrow{f_n} \mathbb{R}$$

to be the constant map given by  $x \mapsto 1$  for all  $x \in [\frac{1}{n}, 1]$ . Let

$$\{0\} \xrightarrow{f_0} \mathbb{R}$$

be the map  $0 \mapsto 0$ . By Proposition 2.16 of the Lecture Notes,  $f_n$  is continuous for all  $n \geq 0$ . The corresponding map

$$[0, 1] \xrightarrow{g} \mathbb{R}$$

is given by

$$x \mapsto \begin{cases} 1 & \text{if } x \in (0, 1], \\ 0 & \text{if } x = 0. \end{cases}$$

Thus  $g$  is not continuous, since for example  $g^{-1}(U) = \{0\}$  for any neighbourhood  $U$  of 0 in  $(\mathbb{R}, \mathcal{O}_{\mathbb{R}})$  which does not contain 1, and  $\{0\}$  is not open in  $[0, 1]$ .

9

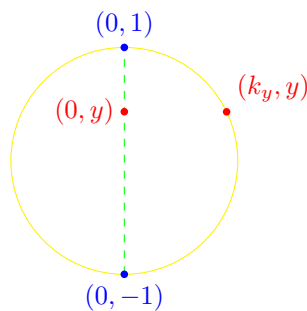
In this question, we will construct step-by-step a continuous map

$$\mathbb{R} \xrightarrow{\phi} S^1.$$

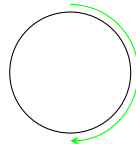
For any  $y \in [-1, 1]$ , there is a unique  $k_y \in \mathbb{R}$  with  $k_y \geq 0$  such that  $\|(k_y, y)\| = 1$ . We have that

$$k_y = \sqrt{1 - y^2},$$

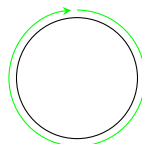
where we take the positive square root.



Given  $x \in [0, \frac{1}{2}]$ , let  $y = 1 - 4x$ , and define  $\phi(x)$  to be  $(k_y, y)$ . We may picture  $\phi$  on  $[0, 1]$  as follows.



Given  $x \in \mathbb{R}$  such that  $x \in [\frac{1}{2}, 1]$ , let  $y = 4x - 3$ , and define  $\phi(x)$  to be  $(-k_y, y)$ . We may picture  $\phi$  on  $[0, 1]$  as follows.



Given  $x \in \mathbb{R}$  and  $n \in \mathbb{Z}$  such that  $x \in [n, n + 1]$ , we define  $\phi(x)$  to be  $\phi(x - n)$ .

**Remark 0.2.** The map  $\phi$  allows us to construct paths around a circle without using trigonometric maps. Sine and cosine define continuous maps, but the proof of this is quite involved. One has two choices.

- (1) Appeal to a notion of angle, which requires a rigorous definition of arc length.
- (2) Appeal to analytic methods such as power series.

Both of these approaches are quite far removed from our intuitive geometric understanding of paths around a circle! Thus we will not go into this. The map  $\phi$  is simpler, and we can construct any path around a circle that we are interested in using it!

**Question.**

- (a) Prove that the map

$$[0, \frac{1}{2}] \longrightarrow \mathbb{R}$$

given by  $y \mapsto k_y$  is continuous.

- (b) Deduce that the maps

$$[0, \frac{1}{2}] \xrightarrow{\phi} S^1$$

and

$$[\frac{1}{2}, 1] \xrightarrow{\phi} S^1$$

are continuous.

- (c) Deduce that the map

$$[0, 1] \xrightarrow{\phi} S^1$$

is continuous.

- (d) Conclude that the map

$$\mathbb{R} \xrightarrow{\phi} S^1$$

is continuous.



**Solution.**

(a) Let us first prove that if

$$X \xrightarrow{f} \mathbb{R}$$

is a continuous map, then the map

$$X \xrightarrow{\sqrt{f}} \mathbb{R}$$

given by  $x \mapsto \sqrt{f(x)}$  is continuous. Since the set of open intervals  $(a, b)$  for  $a, b \in \mathbb{R}$  defines a basis for  $(\mathbb{R}, \mathcal{O}_{\mathbb{R}})$ , by Question 1 (c) it suffices to check that  $(\sqrt{f})^{-1}(a, b)$  is open in  $\mathbb{R}$  for any open interval  $(a, b)$ .

Indeed,

$$\begin{aligned} (\sqrt{f})^{-1}((a, b)) &= \{x \in X \mid a < \sqrt{f(x)} < b\} \\ &= \{x \in X \mid a^2 < f(x) < b^2\}, \end{aligned}$$

since we are taking  $\sqrt{f(x)}$  to be the positive square root. Thus

$$(\sqrt{f})^{-1}((a, b)) = f^{-1}((a^2, b^2)).$$

Since  $f$  is continuous, we have that  $f^{-1}((a^2, b^2))$  is open in  $X$ . Thus  $(\sqrt{f})^{-1}((a, b))$  is open in  $X$ .

This completes the proof that if

$$X \xrightarrow{f} \mathbb{R}$$

is continuous, then

$$X \xrightarrow{\sqrt{f}} \mathbb{R}$$

is continuous.

By Question 3 (f) and Question 6 (a) we have that the map

$$[0, \frac{1}{2}] \xrightarrow{f} \mathbb{R}$$

given by  $y \mapsto 1 - y^2$  is continuous. Thus the map

$$[0, \frac{1}{2}] \longrightarrow \mathbb{R}$$

given by  $y \mapsto k_y$  is continuous, since it is exactly  $\sqrt{f}$ .

(b) The map

$$[0, \frac{1}{2}] \xrightarrow{g} \mathbb{R}^2$$

given by  $x \mapsto (k_y, y)$  with  $y = 1 - 4x$  is  $g' \times i$ , where

$$[0, \frac{1}{2}] \xrightarrow{g'} \mathbb{R}$$

is the map given by  $x \mapsto k_y$  with  $y = 1 - 4x$  and

$$[0, \frac{1}{2}] \xrightarrow{i} \mathbb{R}$$

is the inclusion map.

We have that  $g' = f \circ f'$ , where

$$[0, \frac{1}{2}] \xrightarrow{f'} [-1, 1]$$

is the map given by  $x \mapsto 1 - 4x$ , and where

$$[-1, 1] \xrightarrow{f} \mathbb{R}$$

is the map given by  $y \mapsto k_y$ .

By part (a), we have that  $f$  is continuous. By Question 3 (f), we have that  $f'$  is continuous. Thus, by Proposition 2.16 in the Lecture Notes, we have that  $g'$  is continuous. Moreover, by Proposition 2.15 in the Lecture Notes, we have that  $i$  is continuous. Thus by Question 4 (a) we have that  $g = g' \times i$  is continuous. By Question 7 (a), we deduce that the map

$$[0, \frac{1}{2}] \xrightarrow{\phi} S^1$$

is continuous.

Similarly the map

$$[\frac{1}{2}, 1] \xrightarrow{g} \mathbb{R}^2$$

given by  $x \mapsto (-k_y, y)$  with  $y = 4x - 3$  is  $g' \times i$ , where

$$[\frac{1}{2}, 1] \xrightarrow{g'} \mathbb{R}$$

is the map given by  $x \mapsto k_y$  with  $y = 4x - 3$  and

$$[\frac{1}{2}, 1] \xrightarrow{i} \mathbb{R}$$

is the inclusion map.

We have that  $g' = f \circ f'$ , where

$$[\frac{1}{2}, 1] \xrightarrow{f'} [-1, 1]$$

is the map given by  $x \mapsto 4x - 3$ , and where

$$[-1, 1] \xrightarrow{f} \mathbb{R}$$

is the map given by  $y \mapsto -k_y$ .

We observed above that the map

$$[-1, 1] \longrightarrow \mathbb{R}$$

given by  $y \mapsto k_y$  is continuous. By Question 3 (f) we deduce that  $f$  is continuous. By Question 3 (f), we have that  $f'$  is continuous. Thus, by Proposition 2.16 in the Lecture Notes, we have that  $g'$  is continuous. Moreover, by Proposition 2.15 in the

Lecture Notes, we have that  $i$  is continuous. Thus by Question 4 (a) we have that  $g = g' \times i$  is continuous. By Question 7 (a), we deduce that the map

$$[\frac{1}{2}, 1] \xrightarrow{\phi} S^1$$

is continuous.

(c) It follows immediately from part (b) and Question 8 that

$$[0, 1] \xrightarrow{\phi} S^1$$

is continuous.

(d) For any  $n \in \mathbb{Z}$ , the map

$$[n, n + 1] \xrightarrow{g} [0, 1]$$

given by  $x \mapsto x - n$  is continuous by Question 3 (f). Moreover, by part (c) the map

$$[0, 1] \xrightarrow{\phi} S^1$$

is continuous. Since the map

$$[n, n + 1] \longrightarrow S^1$$

given by  $x \mapsto \phi(x - n)$  is  $g \circ \phi$ , we deduce by Proposition 2.16 in the Lecture Notes that it is continuous.

We deduce by Question 8 that

$$\mathbb{R} \xrightarrow{\phi} S^1$$

is continuous, since we have proven that its restriction to  $[n, n + 1]$  is continuous for every  $n \in \mathbb{Z}$ .

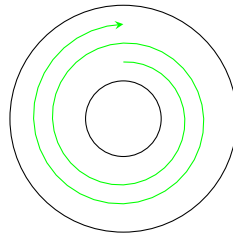
## 10

### Question.

- (a) Prove that the map of Example 2.13 (2) in the Lecture Notes is continuous.
- (b) Prove that the map of Example 2.13 (3) in the Lecture Notes is continuous.
- (c) Find a continuous map

$$I \longrightarrow A_k$$

for a fixed  $0 < k < \frac{1}{2}$  which describes a ‘spiral’ as roughly depicted below, starting at  $(0, \frac{1}{2})$ , passing through  $(0, \frac{5}{8})$ , and ending at  $(0, \frac{3}{4})$ .



- (d) Prove that the map

$$I^2 \longrightarrow I$$

given by  $(x, y) \mapsto \min\{x, y\}$  is continuous. Also, prove that the map

$$I^2 \longrightarrow I$$

given by  $(x, y) \mapsto \max\{x, y\}$  is continuous. Draw a picture of each of these maps! You may find it helpful to think of the copy of  $I$  in the target as a diagonal in  $I^2$ .

### Solution.

(a) Let

$$D^2 \times I \xrightarrow{f} D^2$$

be given by  $(x, y, t) \mapsto ((1-t)x, (1-t)y)$ . Consider the map

$$\mathbb{R}^2 \times I \xrightarrow{g \times g'} \mathbb{R}^2,$$

where

$$\mathbb{R}^2 \times I \xrightarrow{g} \mathbb{R}$$

is given by  $(x, y, t) \mapsto (1-t)x$ , and where

$$\mathbb{R}^2 \times I \xrightarrow{g'} \mathbb{R}$$

is given by  $(x, y, t) \mapsto (1-t)y$ .

By Question 3 (f) and Question 6 (a), the map

$$I \xrightarrow{u} \mathbb{R}$$

given by  $t \mapsto 1-t$  is continuous. Moreover, the identity map

$$\mathbb{R} \xrightarrow{id} \mathbb{R}$$

is continuous. By Question 4 (c), we deduce that the map

$$\mathbb{R}^2 \xrightarrow{id \cdot u} \mathbb{R}$$

is continuous.

Thinking of  $\mathbb{R}^2 \times I$  as  $\mathbb{R} \times (\mathbb{R} \times I)$ , let

$$\mathbb{R}^2 \times I \xrightarrow{p_2} \mathbb{R} \times I$$

denote the projection map. By Proposition 3.2 in the Lecture Notes, we have that  $p_2$  is continuous. We have that  $g' = (id \cdot u) \circ p_2$ . By Proposition 2.16 in the Lecture Notes, we deduce that  $g'$  is continuous.

Let

$$\mathbb{R}^2 \times I \xrightarrow{q} \mathbb{R} \times I$$

denote the map given by  $(x, y, t) \mapsto (x, t)$ . Then  $p = p_2 \circ (\tau \times id)$ , where

$$\mathbb{R}^2 \xrightarrow{\tau} \mathbb{R}^2$$

is the map of Question 4 (e). By Question 4 (e), we have that  $\tau$  is continuous. Since  $id$  is continuous, we deduce by Question 4 (c) that  $q$  is continuous. Observe also that  $g = (id \cdot u) \circ q$ . Thus, by Proposition 2.16 in the Lecture Notes, we conclude that  $g$  is continuous.

Putting everything together, by Question 4 (a) we deduce that the map

$$\mathbb{R}^2 \times I \xrightarrow{g \times g'} \mathbb{R}^2$$

is continuous. Hence, by Question 6 (a), the restriction of  $g \times g'$  to  $D^2 \times I$  is continuous. Since the image of this restriction is contained in (in fact equal to)  $D^2$ , we conclude by Question 7 (a) that  $g \times g'$  defines a continuous map

$$D^2 \times I \longrightarrow D^2.$$

This map is exactly  $f$ .

(b) Let  $k \in \mathbb{R}$ , and let

$$I \xrightarrow{f} S^1$$

be given by  $t \mapsto \phi(kt)$ . Then  $f = \phi \circ g$ , where

$$I \xrightarrow{g} \mathbb{R}$$

is the map given by  $t \mapsto kt$ . By Question 9 (d), we have that  $\phi$  is continuous. By Question 3 (f), we have that  $g$  is continuous. Hence, by Proposition 2.16 in the Lecture Notes,  $f$  is continuous.

(c) The map

$$I \xrightarrow{f} A_k$$

given by  $t \mapsto \frac{1}{2}\phi(t) + (\frac{1}{4}t, 0)$  gives rise to a spiral with the required properties. We must show that  $f$  is continuous.

In order to do so, let us first prove that if  $(X, \mathcal{O}_X)$  is a topological space and

$$X \begin{array}{c} \xrightarrow{u} \\ \xrightarrow{v} \end{array} \mathbb{R}^2$$

are continuous maps, then the map

$$X \xrightarrow{u+v} \mathbb{R}^2$$

given by  $(x, y) \mapsto u(x, y) + v(x, y)$  is continuous. Indeed, we have that  $u + v$  is

$$\left( (p_1 \circ u) + (p_1 \circ v) \right) \times \left( (p_2 \circ u) + (p_2 \circ v) \right).$$

Here

$$\mathbb{R}^2 \begin{array}{c} \xrightarrow{p_1} \\ \xrightarrow{p_2} \end{array} \mathbb{R}$$

are the projection maps.

By Proposition 3.2 in the Lecture Notes,  $p_1$  is continuous. Thus, by Proposition 2.16 in the Lecture Notes,  $p_1 \circ u$  and  $p_1 \circ v$  are continuous. Hence, by Question 3 (h), we have that  $(p_1 \circ u) + (p_1 \circ v)$  is continuous.

By an entirely analogous argument,  $(p_2 \circ u) + (p_2 \circ v)$  is continuous. We deduce by Question 4 (a) that  $u + v$  is continuous.

We now turn to proving that  $f$  is continuous. Since the map

$$I \xrightarrow{\phi} \mathbb{R}^2$$

is continuous by Question 9 (c) and Question 7 (b), we deduce by Question 3 (b) that the map



$$I \xrightarrow{\frac{1}{2}\phi} \mathbb{R}^2$$

is continuous.

The map

$$I \xrightarrow{g} \mathbb{R}^2$$

given by  $t \mapsto (\frac{1}{4}t, 0)$  is  $g' \times 0$ , where

$$I \xrightarrow{0} \mathbb{R}$$

is the constant map  $t \mapsto 0$ , and

$$I \xrightarrow{g'} \mathbb{R}$$

is the map given by  $t \mapsto \frac{1}{4}t$ . By Proposition 2.18 in the Lecture Notes, the map

$$I \xrightarrow{0} \mathbb{R}$$

is continuous. By Question 3 (f) and Question 6 (a), the map  $g'$  is continuous. Thus, by Question 4 (a), we have that  $g = g' \times 0$  is continuous.

We deduce that the map

$$I \xrightarrow{\frac{1}{2}\phi + g} \mathbb{R}^2$$

is continuous. Since the image of this map is contained in  $A_k$ , we deduce by Question 7 (a) that  $\frac{1}{2}\phi + g$  defines a continuous map

$$I \longrightarrow A_k.$$

This map is exactly  $f$ .

(d) The map

$$I^2 \xrightarrow{f} I$$

given by  $(x, y) \mapsto \min\{x, y\}$  can be pictured as mapping everything below the diagonal horizontally left to the diagonal, and everything above the diagonal vertically down to the diagonal.

The map

$$I^2 \longrightarrow I$$

given by  $(x, y) \mapsto \max\{x, y\}$  can be pictured as mapping everything below the diagonal horizontally right to the right vertical face, and everything above the diagonal vertically up to the upper horizontal face.

## 11

### Question.

Let  $\mathbb{R}$  be equipped with its standard topology  $\mathcal{O}_{\mathbb{R}}$ . Prove that a map

$$\mathbb{R} \xrightarrow{f} \mathbb{R}$$

is continuous in the topological sense if and only if it is continuous in the  $\epsilon - \delta$  sense that you have met in real analysis/calculus, namely for all  $x, c, \epsilon \in \mathbb{R}$  with  $\epsilon > 0$  there is a  $\delta \in \mathbb{R}$  with  $\delta > 0$  such that if  $|x - c| < \delta$  then  $|f(x) - f(c)| < \epsilon$ .

*Hint:*

(1) Appeal to Examples 2.9 (1).

(2) Appeal to Question 1 (e).

### Solution.

By Examples 2.9 (1) in the lecture notes,  $\{B_{\epsilon}(x)\}_{x \in \mathbb{R}, \epsilon \in \mathbb{R}, \epsilon > 0}$  defines a basis for  $(\mathbb{R}, \mathcal{O}_{\mathbb{R}})$ . By Question 1 (e) we deduce that  $f$  is continuous in the topological sense if and only if for all  $x, y, \epsilon \in \mathbb{R}$  with  $\epsilon > 0$  such that  $f(x) \in B_{\epsilon}(y)$  there are  $y', \delta \in \mathbb{R}$  with  $y' > 0$  such that  $x \in B_{\delta}(y')$  and  $f(B_{\delta}(y')) \subset B_{\epsilon}(y)$ .

Suppose first that  $f$  is continuous in the topological sense. Taking  $y$  to be  $f(x)$ , we have that there are  $y', \delta \in \mathbb{R}$  with  $y' > 0$  such that  $x \in B_{\delta}(y')$  and  $f(B_{\delta}(y')) \subset B_{\epsilon}(f(x))$ .

Let  $\delta' = \min\{x - (y' - \delta), (y' + \delta) - x\}$ . Then  $B_{\delta'}(x) \subset B_{\delta}(y')$ , and hence  $f(B_{\delta'}(x)) \subset B_{\epsilon}(f(x))$ , as required.

Conversely, suppose that  $f$  is continuous in the  $\epsilon$ - $\delta$  sense. Let  $x, y, \epsilon \in \mathbb{R}$  with  $\epsilon > 0$  be such that  $f(x) \in B_{\epsilon}(y)$ . Let  $\epsilon' = \min\{f(x) - (y - \epsilon), (y + \epsilon) - f(x)\}$ . Then  $B_{\epsilon'}(f(x)) \subset B_{\epsilon}(y)$ . Take  $c$  to be  $x$ . Since  $f$  is continuous in the  $\epsilon$ - $\delta$  sense, there exists  $\delta \in \mathbb{R}$  with  $\delta > 0$  such that  $f(B_{\delta}(x)) \subset B_{\epsilon'}(f(x)) \subset B_{\epsilon}(y)$ .

## 12

Let  $(X, <)$  and  $(Y, <)$  be pre-orderings. A *morphism* from  $(X, <)$  to  $(Y, <)$  is a map

$$X \xrightarrow{f} Y$$

such that if  $x < x'$  then  $f(x) < f(x')$ .

### Question.

- (a) What does this requirement correspond to if we picture  $(X, <)$  and  $(Y, <)$  via arrows as in Question 8 of Exercise Sheet 1?

Recall that by Question 10 of Exercise Sheet 2, Alexandroff topologies on a set  $X$  correspond bijectively to pre-orderings on  $X$ , in the following way.

- (i) Let  $(X, \mathcal{O}_X)$  be an Alexandroff topological space. Given  $x \in X$ , define  $U_x$  to be the intersection of all neighbourhoods of  $x$  in  $(X, \mathcal{O}_X)$ . To  $(X, \mathcal{O}_X)$  we associate the pre-ordering  $<$  defined by  $x < x'$  if  $U_x \supset U_{x'}$ .
- (ii) Let  $(X, <)$  be a pre-ordering. We define a topology  $\mathcal{O}_X$  on  $X$  by stipulating that  $U \subset X$  belongs to  $\mathcal{O}_X$  if for any  $x \in U$  and any  $x' \in X$  such that  $x < x'$  we have that  $x' \in U$ . We have that  $(X, \mathcal{O}_X)$  is an Alexandroff space.

### Question.

- (b) Let  $(X, \mathcal{O}_X)$  be an Alexandroff topological space, and let  $<_X$  denote the corresponding pre-ordering of  $X$ . Let  $(Y, \mathcal{O}_Y)$  be another Alexandroff topological space, and let  $<_Y$  denote the corresponding pre-ordering.

Prove that a map

$$X \xrightarrow{f} Y$$

is continuous if and only if  $f$  defines a morphism from  $(X, <_X)$  to  $(Y, <_Y)$ .

**Solution.**

- (a) The requirement that if  $x < x'$  then  $f(x) < f(x')$  corresponds to requiring that if there is an arrow from  $x$  to  $x'$  in  $X$ , then there is an arrow from  $f(x)$  to  $f(x')$  in  $Y$ .
- (b) Suppose that  $f$  is continuous. Let  $x, x' \in X$  be such that  $x <_X x'$ . By Question 10 (b) of Exercise Sheet 2, we have that  $\{U_x\}_{x \in X}$  defines a basis for  $(X, \mathcal{O}_X)$ , and  $\{U_y\}_{y \in Y}$  defines a basis for  $(Y, \mathcal{O}_Y)$ . By Question 1 (e), we deduce that there is an  $x'' \in X$  such that  $x \in U_{x''}$  and  $U_{x''} \subset f^{-1}(U_{f(x)})$ .

By definition of  $U_x$ , we have that  $U_x \subset U_{x''}$ , and hence that  $U_x \subset f^{-1}(U_{f(x)})$ . Moreover, by definition of  $<_X$ , we have that  $U_x \supset U_{x'}$ . Thus we have that  $U_{x'} \subset f^{-1}(U_{f(x)})$ . Since  $x' \in U_{x'}$ , we deduce that  $f(x') \in U_{f(x)}$ .

By definition of  $U_{f(x')}$ , we conclude that  $U_{f(x')} \subset U_{f(x)}$ . Thus by definition of  $<_Y$  we have that  $f(x) \leq_Y f(x')$ .

Conversely, suppose that if  $x, x' \in X$  have the property that  $x \leq_X x'$ , then  $f(x) \leq_Y f(x')$ . Let  $x \in X$ , and let  $U$  be a neighbourhood of  $f(x)$  in  $(Y, \mathcal{O}_Y)$ . Then by definition of  $U_{f(x)}$ , we have that  $U_{f(x)} \subset U$ .

Let  $x' \in U_x$ . Then by definition of  $U_{x'}$  we have that  $U_{x'} \subset U_x$ , and hence that  $x \leq_X x'$ . By assumption, we deduce that  $f(x) \leq_Y f(x')$ . By definition of  $<_Y$ , we then have that  $U_{f(x)} \supset U_{f(x')}$ . Hence  $U_{f(x')} \subset U$ . In particular, since  $f(x') \in U_{f(x')}$  we have that  $f(x') \in U$ .

This proves that  $f(U_x) \subset U$ . We have that  $x \in U_x$ . By Question 1 (b), we conclude that  $f$  is continuous.