

Revision Question 10 — 09/05/14

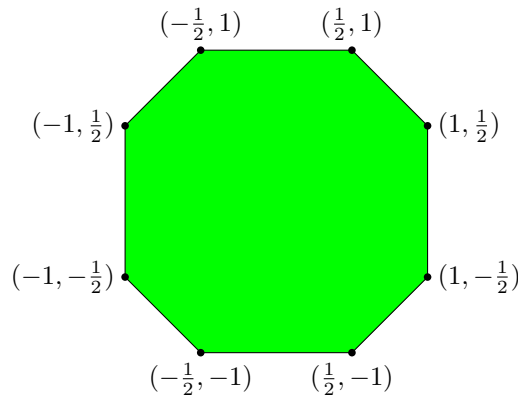
Let X be the set $[0, 1] \times]0, 1[\times]0, 1[$. Let \mathcal{O}_X be the subspace topology on X with respect to $(\mathbb{R}^3, \mathcal{O}_{\mathbb{R}^3})$.

- a) Find an open covering of X which does not admit a finite subcovering. [3 marks]
- b) Let A be the subset of X given by $] \frac{1}{2}, 1[\times] \frac{1}{4}, \frac{3}{4}[\times] \frac{1}{4}, \frac{3}{4}[$. Decide whether the following are true or false, and justify your answers.
- The set A belongs to \mathcal{O}_X .
 - The set A is closed in X with respect to \mathcal{O}_X .


[6 marks]

- c) Let $\mathcal{O}_{[0,1]}$ be the subspace topology on $[0, 1]$ with respect to $(\mathbb{R}, \mathcal{O}_{\mathbb{R}})$. Give a counterexample to the following statement: for every subset W of X such that W belongs to \mathcal{O}_X , and such that $\{ \frac{1}{2} \} \times]0, 1[\times]0, 1[$ is a subset of W , there is a neighbourhood U of $\frac{1}{2}$ in $[0, 1]$ with respect to $\mathcal{O}_{[0,1]}$ such that $U \times]0, 1[\times]0, 1[$ is a subset of W . [4 marks]
- d) Is it possible to find a counterexample if we replace X by $[0, 1] \times [0, 1] \times [0, 1]$? Justify your answer. You may quote without proof any results from the course. [5 marks]

Let O be the octagon in \mathbb{R}^2 depicted below.



Let S be the square in \mathbb{R}^2 depicted below.




Let Y be the subset of \mathbb{R}^2 given by the union of

$$O \setminus \left(]-\frac{1}{4}, \frac{1}{4}[\times]-\frac{1}{4}, \frac{1}{4}[\right)$$

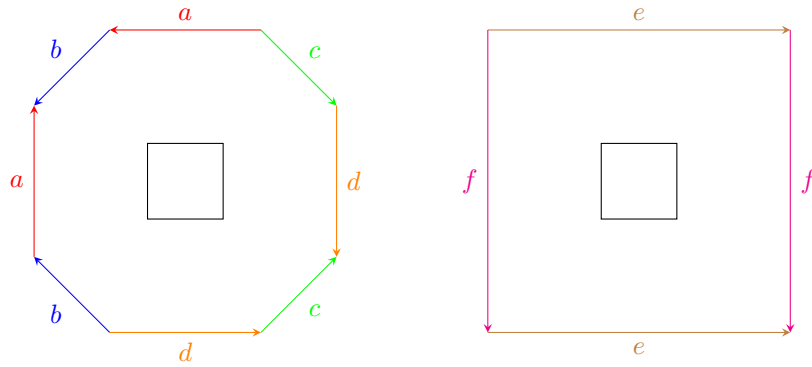
and

$$S \setminus \left(]\frac{11}{4}, \frac{13}{4}[\times]-\frac{1}{4}, \frac{1}{4}[\right).$$



Let \mathcal{O}_Y be the subspace topology on Y with respect to $(\mathbb{R}^2, \mathcal{O}_{\mathbb{R}^2})$.

- e) Prove that (Y, \mathcal{O}_Y) is not connected. [5 marks]
- f) Let \sim be the equivalence relation on Y which identifies, without a twist, the edges with the same letter in the figure below.



Define an equivalence relation \approx on Y such that the following hold.

- i) Suppose that x_0 and x_1 belong to \mathbb{R}^2 , and that $x_0 \sim x_1$. Then $x_0 \approx x_1$.
- ii) We have that $(Y/\approx, \mathcal{O}_{Y/\approx})$ is a surface.

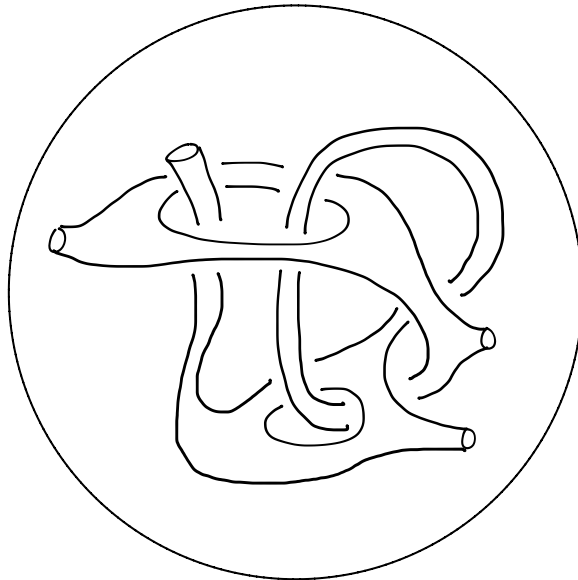
You do not need to prove that i) and ii) hold. [6 marks]

g) Equip $(Y/\approx, \mathcal{O}_{Y/\approx})$ with the structure of a Δ -complex. [4 marks]

h) Calculate the Euler characteristic of $(Y/\approx, \mathcal{O}_{Y/\approx})$. [3 marks]

i) Assume that $(Y/\approx, \mathcal{O}_{Y/\approx})$ is an n -handlebody for some n . Using your answer to part h) or otherwise, determine n . You may quote without proof any results from the course. [3 marks]

Let (X, \mathcal{O}_X) be the surface given by the ‘sphere with tunnels’ depicted below.



- j) Which of the surfaces in the classification is (X, \mathcal{O}_X) homeomorphic to? Justify your answer by a surgery argument. [6 marks]
- k) Hence or otherwise, calculate the Euler characteristic of (X, \mathcal{O}_X) .